

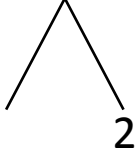


NAME \_\_\_\_\_ DATE \_\_\_\_\_

## ADDITION OF TWO DIGIT NUMBERS

Solve using number bonds. Write the two number sentences that show that you added the ten first. Draw quick tens and ones.

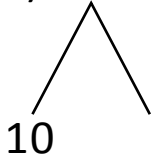
a)  $12 + 14 = \underline{\quad}$

+ 

$14 + 10 = \underline{\quad}$

$\underline{\quad} + 2 = \underline{\quad}$

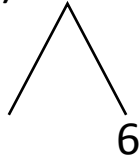

b)  $11 + 13 = \underline{\quad}$

+ 

$13 + 10 = \underline{\quad}$

$\underline{\quad} + 1 = \underline{\quad}$

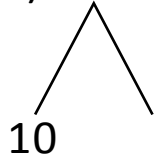
c)  $16 + 11 = \underline{\quad}$

+ 

$11 + 10 = \underline{\quad}$

$\underline{\quad} + 6 = \underline{\quad}$

d)  $14 + 11 = \underline{\quad}$

+ 

$11 + 10 = \underline{\quad}$

$\underline{\quad} + 4 = \underline{\quad}$